

# Southport Elementary School

Grade 1<sup>st</sup>

41

Name \_\_\_\_\_

# High Frequency Words

eight

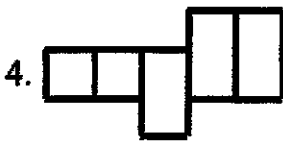
our

about

carry

animal

give




R	G	I	V	E	A
E	I	G	H	T	N
W	S	A	O	U	I
C	A	R	R	Y	M
A	B	O	U	T	A
G	O	U	R	K	L

ABC Order

1.	_____
2.	_____
3.	_____
4.	_____
5.	_____
6.	_____

Name \_\_\_\_\_

## THE CITY



A city is a place. It is a busy place. A city has a lot of streets.

17 The streets are close together. A city has a lot of buildings.

29 The buildings are tall. The buildings are close together.

38 A city has a lot of houses. The houses are close together.

63 A city has a lot of people. They live in the city. They work there. They shop there. Do you live in a city?

74

1. What is a city?

- a. a building
- b. a street
- c. a place

2. Yes or no?

The houses in the city are tall.

- a. yes
- b. no

3. People in the city work and \_\_\_\_\_.


- a. has
- b. shop
- c. see

4. People live in the \_\_\_\_\_.

- a. buildings
- b. city
- c. shops

Name: \_\_\_\_\_

# Numbers 100-120



Write the number that comes after or before.

After

100 \_\_\_\_\_

106 \_\_\_\_\_

104 \_\_\_\_\_

116 \_\_\_\_\_

110 \_\_\_\_\_

117 \_\_\_\_\_

102 \_\_\_\_\_

Before

\_\_\_\_\_ 106

\_\_\_\_\_ 118

\_\_\_\_\_ 101

\_\_\_\_\_ 109

\_\_\_\_\_ 120

\_\_\_\_\_ 104

\_\_\_\_\_ 111

After

103 \_\_\_\_\_

114 \_\_\_\_\_

108 \_\_\_\_\_

115 \_\_\_\_\_

119 \_\_\_\_\_






























101 \_\_\_\_\_

105 \_\_\_\_\_

Name: \_\_\_\_\_

# Ten Frames

Write  $<$  or  $>$  to compare the ten frames.



Name: \_\_\_\_\_

Date: \_\_\_\_\_



# The New Kid



135 words

Directions: Read the story 3 times. Then, answer the questions.

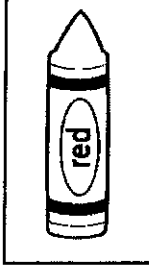
“Good morning!” said Miss Smith. “We have a new student. Her name is Rachel.” Rachel sat down in her new seat.

At recess, no one played with Rachel. She ate lunch by herself. No one picked Rachel to read with them in class.

The next day, a boy walked up to Rachel. “Hi! I’m Ben!” he said. “No one likes to be the new kid. Just stick with me!” Rachel smiled. Rachel and Ben played games together at recess. They ate together at lunch. They read books together in class too! Ben and Rachel became best friends!

The next day, the door opened. “Good morning!” said Miss Smith. “We have a new student. Her name is Kate.” Ben looked over at Rachel. “This looks like a job for us!” he said. Rachel smiled at Ben.

1. Use a crayon to find the answers.



What happened on Rachel’s first day?

2. How do you think Rachel feels in the beginning and in the end?

**B**

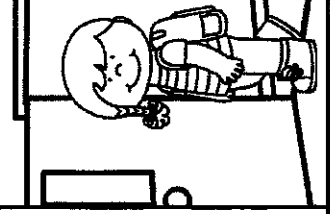

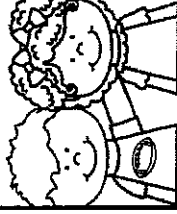
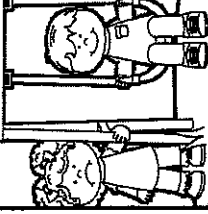

**E**

3. Would you be Ben’s friend? Why?

\_\_\_\_\_  
\_\_\_\_\_  
\_\_\_\_\_

4. What will Rachel and Ben do next?

\_\_\_\_\_  
\_\_\_\_\_  
\_\_\_\_\_



Name \_\_\_\_\_

## Spelling Words

➡ Directions: Write the spelling words in ABC order.

mail  
chain  
took  
play

1. \_\_\_\_\_
2. \_\_\_\_\_
3. \_\_\_\_\_
4. \_\_\_\_\_

way  
hood  
rain

1. \_\_\_\_\_
2. \_\_\_\_\_
3. \_\_\_\_\_

day  
carry  
our


1. \_\_\_\_\_
2. \_\_\_\_\_
3. \_\_\_\_\_



Name: \_\_\_\_\_

# Missing Numbers

Fill in the missing numbers.



35 36 ○ ○

72 ○ 74 ○

○ 18 ○ 20

○ ○ 49 50

22 ○ 24 ○

36 ○ ○ 39

○ 58 59 ○

20 21 ○ ○

○ ○ 65 66

○ ○ 80 81

75 ○ ○ 78


43 ○ ○ ○

○ 52 ○ 54

○ 89 ○ 91

Name: \_\_\_\_\_


# Write a Number That Has...



4 tens	8 ones	6 tens	5 ones
9 ones	5 tens	0 ones	4 ones
1 ten	3 ones	9 tens	7 tens
2 ones	6 ones	2 tens	7 ones
8 tens	0 tens	1 one	3 tens

Name \_\_\_\_\_

## A PICNIC



People eat outside at a picnic. The food is made at home.  
12 People take the food to a park. They can eat on the grass.  
25 They can eat on a table. It is fun to eat outside. It is fun to  
41 play at a picnic, too. Children run at a picnic. They play  
53 games at a picnic. They play on the swings. They go down  
5 a slide. Picnics are a lot of fun.

73

1. What do people do  
at a picnic?

- a. eat outside
- b. go home
- c. eat at home

2. Yes or no?

People play games  
at a picnic.

- a. yes
- b. no

3. People can eat  
on the \_\_\_\_\_.

- a. slides
- b. swings
- c. grass

4. People take the food  
to the \_\_\_\_\_.

- a. home
- b. park
- c. slide

Name: \_\_\_\_\_

Date: \_\_\_\_\_

Today is:

Monday

Tuesday

Wednesday

Thursday


Friday

Saturday

Sunday

**If you could get one animal, what would you get?**


rabbit




bird



tiger



penguin



Draw a Picture

A large rounded rectangular box for drawing a picture of the chosen animal.



I used capital letters.




I used spaces.



I used punctuation.

Name: \_\_\_\_\_

# Number Parts



Fill in the missing number parts.

26  
20 6

32  
○ ○

45  
○ ○

39  
○ ○

61  
○ ○

53  
○ ○

29  
○ ○

44  
○ ○

78  
○ ○

68  
○ ○

39  
○ ○

77  
○ ○

82  
○ ○


59  
○ ○

93  
○ ○

50  
○ ○

Name: \_\_\_\_\_

# Expand It



Write how many tens and ones  
each number has.

$$28 = \square \text{ tens } \square \text{ ones}$$

$$65 = \square \text{ tens } \square \text{ ones}$$

$$82 = \square \text{ tens } \square \text{ ones}$$

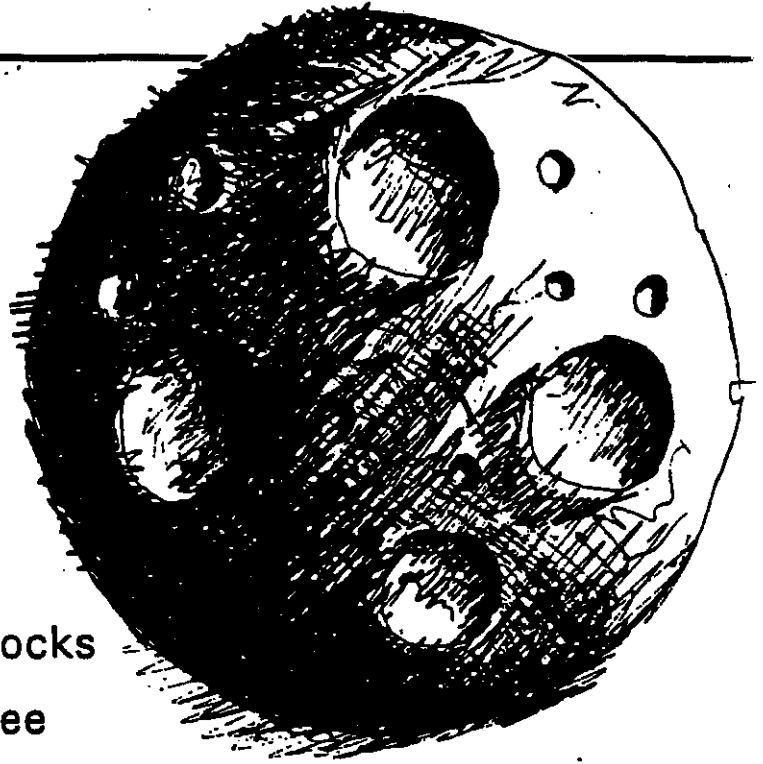
$$39 = \square \text{ tens } \square \text{ ones}$$

$$40 = \square \text{ tens } \square \text{ ones}$$

$$71 = \square \text{ tens } \square \text{ ones}$$

$$54 = \square \text{ tens } \square \text{ ones}$$

$$26 = \square \text{ tens } \square \text{ ones}$$

 **THE MOON**

The moon is big. It is far  
7 away. It is in the sky. Some  
14 men went to the moon. The  
20 men saw rocks. The rocks  
25 were gray and brown.  
29 Some rocks were big. Some rocks  
35 were little. The men did not see  
42 animals. The men did not see plants. The men did not see water.  
55 There was no air on the moon. There was no wind on the  
moon. You can see the moon at night.

76

1. What is on  
the moon?

- a. rocks
- b. plants
- c. animals

2. Yes or no?  
There is water on  
the moon.

- a. yes
- b. no

3. Moon rocks are  
\_\_\_\_\_.

- a. plants
- b. animals
- c. gray and brown

4. You see the moon  
in the \_\_\_\_\_.

- a. plants
- b. water
- c. sky

Name: \_\_\_\_\_

**Read it , Fix it  
and Write it !**

Directions: Rewrite each sentence correctly.  
Begin each sentence with a capital letter and  
add punctuation.

## Recess

1. what can we play at recess

2. we can play on the slide

3. we can play on the swing


4. we can play tag

5. i will play tag with mike

I used capital letters.

I used spaces.

I used punctuation.






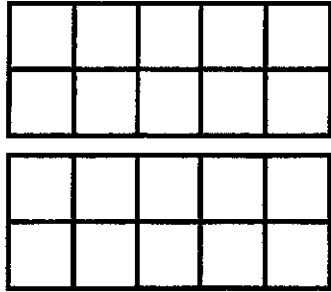





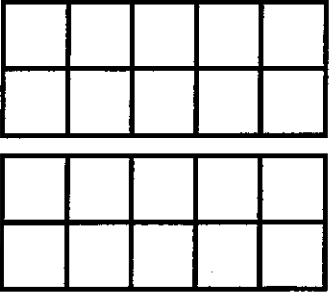












Name: \_\_\_\_\_

# Teen Numbers



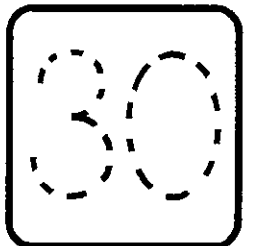



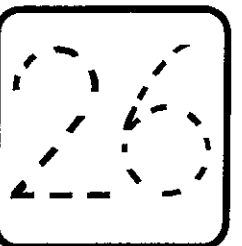

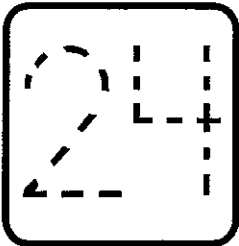
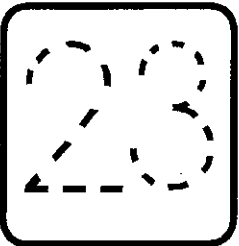








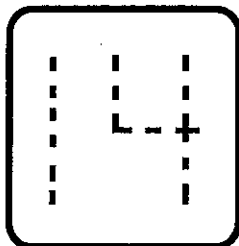





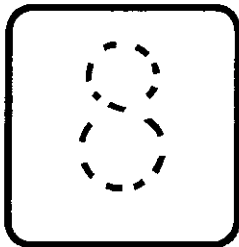


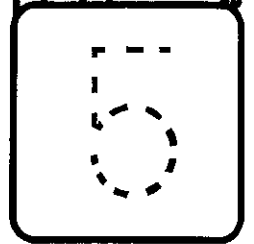


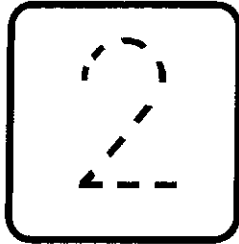


Color the ten frames to match the numbers.

 14		 10	
 13		 15	
 17		 19	
 11		 18	
 16		 12	

Name: \_\_\_\_\_

# Numbers to 30

Fill in the missing numbers to 30.



Name: \_\_\_\_\_


# Number Order

Write the numbers that come before and after.


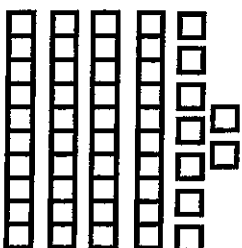




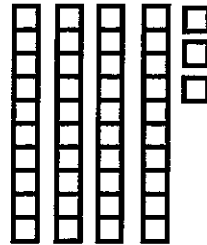






Name: \_\_\_\_\_

# Count & Write



Count the blocks and write how many there are.



Name: \_\_\_\_\_

**Read it , Fix it  
and Write it !**

Directions: Rewrite each sentence correctly.  
Begin each sentence with a capital letter and  
add punctuation.

## The Zoo

1. ben is going to the zoo

2. ben wants to see the lion

3. dad takes ben to see the lion


4. ben saw a monkey at the zoo

5. ben saw a hippo at the zoo

I used capital letters.

I used spaces.

I used punctuation.



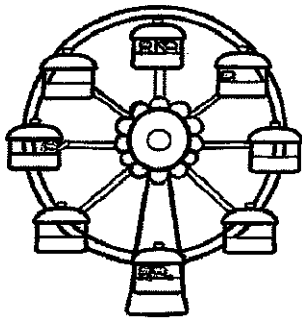
Name: \_\_\_\_\_

Date: \_\_\_\_\_


Today is: Monday Tuesday Wednesday Thursday  
Friday Saturday Sunday

**If you could go to any place, where would you go?**


carnival



castle





circus



North Pole



Draw a Picture



☆ I used capital letters. ☆ I used spaces. ☆ I used punctuation.

Name \_\_\_\_\_

## Spelling Words

➡ Directions: Write the spelling words in ABC order.

book  
look  
cook  
took

1. \_\_\_\_\_

2. \_\_\_\_\_

3. \_\_\_\_\_

4. \_\_\_\_\_

hood  
wood  
nose

1. \_\_\_\_\_

2. \_\_\_\_\_

3. \_\_\_\_\_

cute  
buy  
done

1. \_\_\_\_\_

2. \_\_\_\_\_

3. \_\_\_\_\_

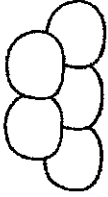
Name: \_\_\_\_\_

Date: \_\_\_\_\_



© Meet Miss Parker

# Snow Much Fun



138 words

Directions: Read the story 3 times. Then, answer the questions.

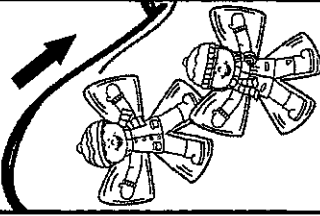



Matt looks out the window. "Look at that snow!" he says. He runs to find his sister Tess. "Let's go out and play!" he says.

Matt and Tess run outside. Matt sticks out his tongue to catch some snowflakes. "I got three snowflakes," he yells. "Look!"


Just then, Tess rolls up some snow to make a snowball. She lobs the snowball at Matt. **BOOM!** "You got me!" Matt giggles.

After, Tess runs over to the big sled hill. Matt runs after her! They run to the top of the hill then roll down. They make snow angels at the bottom of the hill. They move their arms and legs in and out, in and out.

"This was fun, but I'm cold now." Matt says. They go home for hot cocoa. "This day was snow much fun!" Tess giggles.



1. Use a crayon to find the answers.



How many snowflakes did Matt get?

2. What does the word lob mean?

throw

roll

eat

3. Why do Matt and Tess go home?

4. Sequence the story using #1-5.

They make snow angels.

Tess makes a snowball.

They go home for hot cocoa.

Matt catches snowflakes.

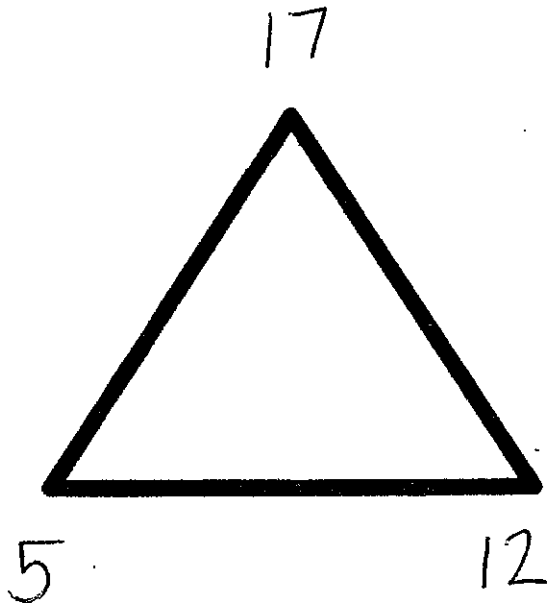
They roll down the hill.



I.OA.B.3

Name \_\_\_\_\_

Write all of the number sentences that belong to each fact triangle.

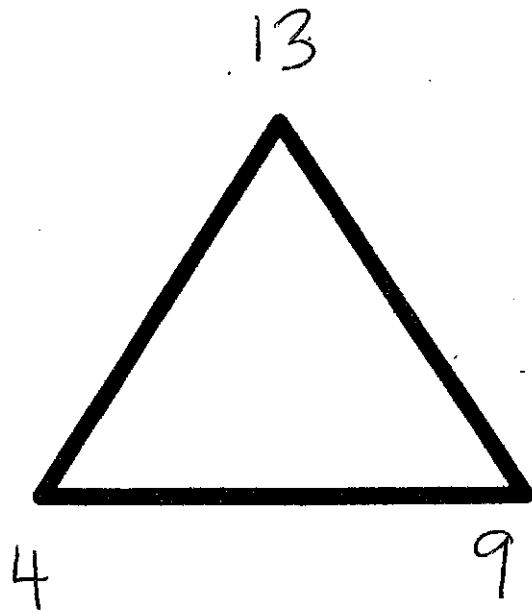


$$\underline{\quad} + \underline{\quad} = \underline{\quad}$$

$$\underline{\quad} + \underline{\quad} = \underline{\quad}$$

$$\underline{\quad} - \underline{\quad} = \underline{\quad}$$

$$\underline{\quad} - \underline{\quad} = \underline{\quad}$$



$$\underline{\quad} + \underline{\quad} = \underline{\quad}$$

$$\underline{\quad} + \underline{\quad} = \underline{\quad}$$

$$\underline{\quad} - \underline{\quad} = \underline{\quad}$$

$$\underline{\quad} - \underline{\quad} = \underline{\quad}$$

**Addition with Three Addends**Total Problems: **27**  
Problems Correct: \_\_\_\_\_

Solve each problem.

**Keep Up the Good Work!**

1. 
$$\begin{array}{r} 5 \\ 3 \\ +4 \\ \hline \end{array}$$

2. 
$$\begin{array}{r} 10 \\ 0 \\ +5 \\ \hline \end{array}$$

3. 
$$\begin{array}{r} 7 \\ 2 \\ +8 \\ \hline \end{array}$$

4. 
$$\begin{array}{r} 4 \\ 5 \\ +2 \\ \hline \end{array}$$

5. 
$$\begin{array}{r} 2 \\ 3 \\ +9 \\ \hline \end{array}$$

6. 
$$\begin{array}{r} 8 \\ 7 \\ +2 \\ \hline \end{array}$$

7. 
$$\begin{array}{r} 4 \\ 5 \\ +7 \\ \hline \end{array}$$

8. 
$$\begin{array}{r} 6 \\ 2 \\ +6 \\ \hline \end{array}$$

9. 
$$\begin{array}{r} 3 \\ 7 \\ +5 \\ \hline \end{array}$$

10. 
$$\begin{array}{r} 4 \\ 2 \\ +8 \\ \hline \end{array}$$

11. 
$$\begin{array}{r} 1 \\ 1 \\ +5 \\ \hline \end{array}$$

12. 
$$\begin{array}{r} 4 \\ 0 \\ +6 \\ \hline \end{array}$$

13. 
$$\begin{array}{r} 2 \\ 2 \\ +5 \\ \hline \end{array}$$

14. 
$$\begin{array}{r} 3 \\ 5 \\ +6 \\ \hline \end{array}$$

15. 
$$\begin{array}{r} 5 \\ 1 \\ +6 \\ \hline \end{array}$$

16. 
$$\begin{array}{r} 11 \\ 8 \\ +8 \\ \hline \end{array}$$

17. 
$$\begin{array}{r} 4 \\ 8 \\ +4 \\ \hline \end{array}$$

18. 
$$\begin{array}{r} 5 \\ 7 \\ +4 \\ \hline \end{array}$$

19. 
$$\begin{array}{r} 3 \\ 9 \\ +3 \\ \hline \end{array}$$

20. 
$$\begin{array}{r} 1 \\ 3 \\ +8 \\ \hline \end{array}$$

21. 
$$\begin{array}{r} 7 \\ 1 \\ +5 \\ \hline \end{array}$$

22. 
$$\begin{array}{r} 12 \\ 0 \\ +6 \\ \hline \end{array}$$

23. 
$$\begin{array}{r} 5 \\ 4 \\ +7 \\ \hline \end{array}$$

24. 
$$\begin{array}{r} 3 \\ 0 \\ +8 \\ \hline \end{array}$$

25. 
$$\begin{array}{r} 4 \\ 8 \\ +5 \\ \hline \end{array}$$

26. 
$$\begin{array}{r} 9 \\ 3 \\ +3 \\ \hline \end{array}$$

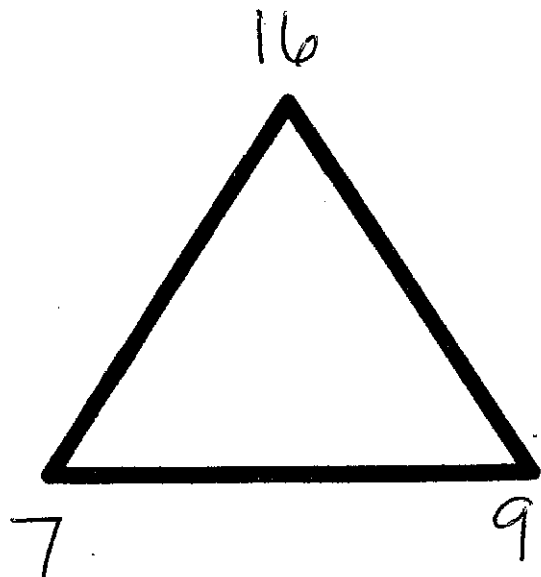
27. 
$$\begin{array}{r} 10 \\ 0 \\ +8 \\ \hline \end{array}$$



I.OA.B.3

Name \_\_\_\_\_

Write all of the number sentences that belong to each fact triangle.

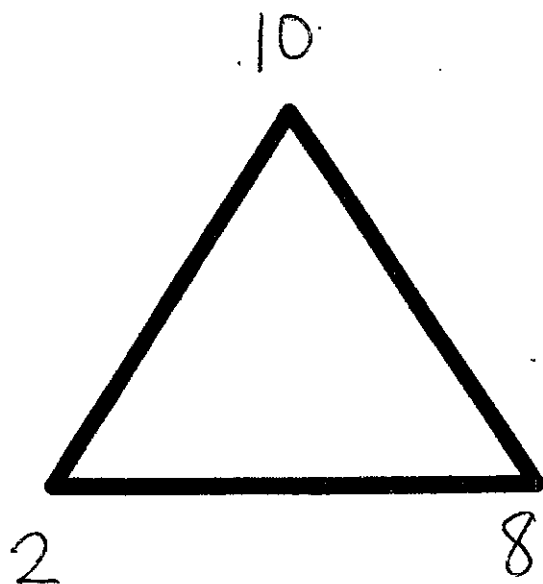


$$\underline{\quad} + \underline{\quad} = \underline{\quad}$$

$$\underline{\quad} + \underline{\quad} = \underline{\quad}$$

$$\underline{\quad} - \underline{\quad} = \underline{\quad}$$

$$\underline{\quad} - \underline{\quad} = \underline{\quad}$$



$$\underline{\quad} + \underline{\quad} = \underline{\quad}$$

$$\underline{\quad} + \underline{\quad} = \underline{\quad}$$

$$\underline{\quad} - \underline{\quad} = \underline{\quad}$$

$$\underline{\quad} - \underline{\quad} = \underline{\quad}$$

### Missing Addends

Total Problems: **27**  
 Problems Correct: \_\_\_\_\_

Solve each problem.

### Find the Missing Pieces!

1. 
$$\begin{array}{r} 9 \\ + \square \\ \hline 13 \end{array}$$

2. 
$$\begin{array}{r} 6 \\ + \square \\ \hline 13 \end{array}$$

3. 
$$\begin{array}{r} 9 \\ + \square \\ \hline 18 \end{array}$$

4. 
$$\begin{array}{r} 4 \\ + \square \\ \hline 13 \end{array}$$

5. 
$$\begin{array}{r} 4 \\ + \square \\ \hline 10 \end{array}$$

6. 
$$\begin{array}{r} 7 \\ + \square \\ \hline 16 \end{array}$$

7. 
$$\begin{array}{r} 7 \\ + \square \\ \hline 11 \end{array}$$

8. 
$$\begin{array}{r} 6 \\ + \square \\ \hline 14 \end{array}$$

9. 
$$\begin{array}{r} 8 \\ + \square \\ \hline 14 \end{array}$$

10. 
$$\begin{array}{r} 8 \\ + \square \\ \hline 12 \end{array}$$

11. 
$$\begin{array}{r} 5 \\ + \square \\ \hline 11 \end{array}$$

12. 
$$\begin{array}{r} 9 \\ + \square \\ \hline 13 \end{array}$$

13. 
$$\begin{array}{r} 9 \\ + \square \\ \hline 15 \end{array}$$

14. 
$$\begin{array}{r} 10 \\ + \square \\ \hline 12 \end{array}$$

15. 
$$\begin{array}{r} 10 \\ + \square \\ \hline 18 \end{array}$$

16. 
$$\begin{array}{r} 8 \\ + \square \\ \hline 16 \end{array}$$

17. 
$$\begin{array}{r} 7 \\ + \square \\ \hline 12 \end{array}$$

18. 
$$\begin{array}{r} 6 \\ + \square \\ \hline 11 \end{array}$$

19. 
$$\begin{array}{r} 5 \\ + \square \\ \hline 10 \end{array}$$

20. 
$$\begin{array}{r} 7 \\ + \square \\ \hline 10 \end{array}$$

21. 
$$\begin{array}{r} 8 \\ + \square \\ \hline 15 \end{array}$$

22. 
$$\begin{array}{r} 5 \\ + \square \\ \hline 13 \end{array}$$


23. 
$$\begin{array}{r} 14 \\ + \square \\ \hline 16 \end{array}$$

24. 
$$\begin{array}{r} 9 \\ + \square \\ \hline 15 \end{array}$$

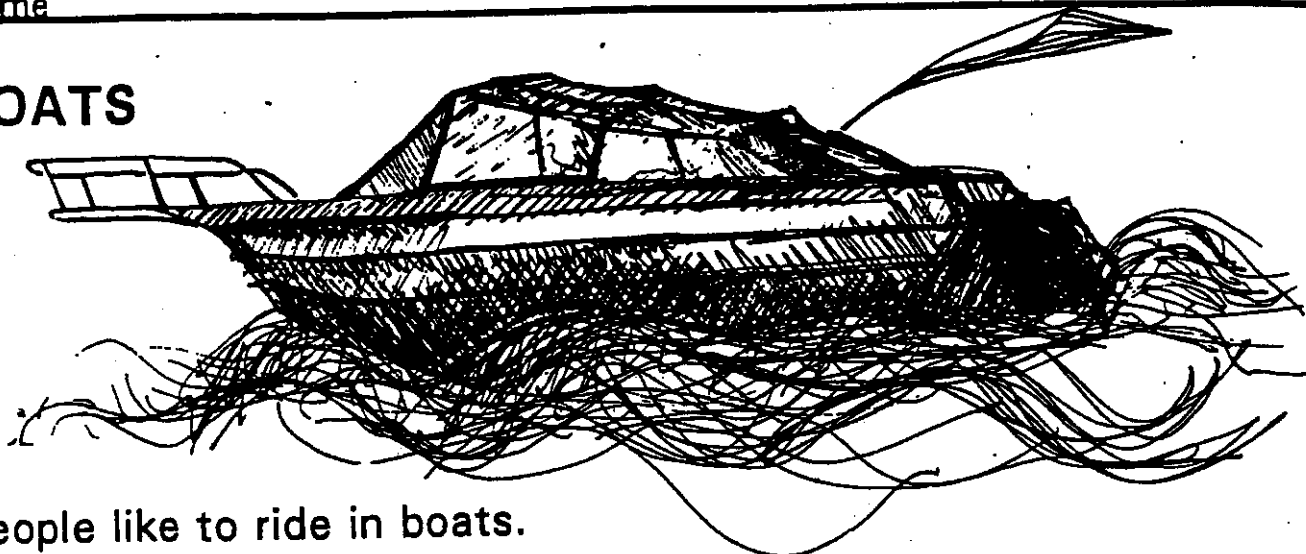
25. 
$$\begin{array}{r} 5 \\ + \square \\ \hline 16 \end{array}$$

26. 
$$\begin{array}{r} 6 \\ + \square \\ \hline 12 \end{array}$$

27. 
$$\begin{array}{r} 8 \\ + \square \\ \hline 14 \end{array}$$



# BOATS



People like to ride in boats.

6 Boats go in the water. A lot of things make boats go. Wind makes  
20 boats go. These boats have sails. These boats go fast in a big  
33 wind. A motor makes boats go. Motor boats can go fast.  
44 People make boats go. They row with two oars. It is work to row  
a boat. It is fun, too. Do you like boats?

68

1. Where do boats go?
  - a. work
  - b. water
  - c. motor

2. Yes or no?  
A motor makes a boat go fast.
  - a. yes
  - b. no

3. People row a boat with two \_\_\_\_\_.
  - a. motors
  - b. oars
  - c. winds

4. People ride in \_\_\_\_\_.
  - a. motors
  - b. boats
  - c. sails

Name \_\_\_\_\_

# High Frequency Words

way

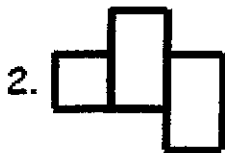
some

away

now

why


today



F	D	T	H	I	E	W	Q
N	A	G	T	O	D	A	Y
Q	Z	K	B	X	W	L	N
M	P	Z	L	K	A	R	G
K	L	J	C	H	Y	S	A
B	U	I	C	W	K	J	Y
S	O	M	E	H	I	J	R
A	W	A	Y	Y	N	O	W

## ABC Order

1.	_____
2.	_____
3.	_____
4.	_____
5.	_____
6.	_____



Only fail if I give up. I won't give up

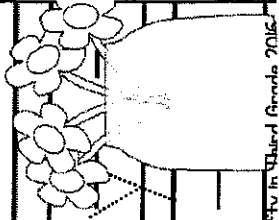
It's okay not to be perfect

Nothing is too hard for me

I use strategies I have learned

I am a champion

I can compete with others today



Name: \_\_\_\_\_

Date: \_\_\_\_\_

Today is:

Monday

Tuesday

Wednesday

Thursday


Friday

Saturday

Sunday

### Write about your dad.

kind



smart



strong



helpful



Draw a Picture

©Teaching Bill Fizz Cend 2016



I used capital letters.



I used spaces.




I used punctuation.



Name: \_\_\_\_\_

# Making Ten



How many ways  
can you make 10?

$$\underline{\quad} + \underline{\quad} = 10$$

$$\underline{\quad} + \underline{\quad} = 10$$

$$\underline{\quad} + \underline{\quad} = 10$$

$$\underline{\quad} + \underline{\quad} = 10$$

$$\underline{\quad} + \underline{\quad} = 10$$

$$\underline{\quad} + \underline{\quad} = 10$$


$$\underline{\quad} + \underline{\quad} = 10$$

$$\underline{\quad} + \underline{\quad} = 10$$

$$\underline{\quad} + \underline{\quad} = 10$$

$$\underline{\quad} + \underline{\quad} = 10$$

$$\underline{\quad} + \underline{\quad} = 10$$



Name: \_\_\_\_\_

# Add It Up

## Number Lines

$4 + 2 + 1 = \underline{\quad}$

$7 + 2 + 6 = \underline{\quad}$

$6 + 5 + 2 = \underline{\quad}$

$5 + 2 + 4 = \underline{\quad}$

$3 + 7 + 4 = \underline{\quad}$

$9 + 1 + 3 = \underline{\quad}$

$1 + 9 + 5 = \underline{\quad}$

$6 + 2 + 6 = \underline{\quad}$

$5 + 3 + 5 = \underline{\quad}$

$3 + 3 + 3 = \underline{\quad}$

$8 + 2 + 1 = \underline{\quad}$

$8 + 1 + 0 = \underline{\quad}$

$6 + 0 + 3 = \underline{\quad}$

$4 + 3 + 4 = \underline{\quad}$



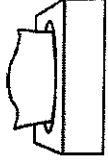
Name: \_\_\_\_\_

Date: \_\_\_\_\_



© Meet Miss Parker

# A Sick Day For Carlos



126 words

Directions: Read the story 3 times. Then, answer the questions.

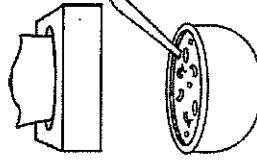
"It is time for school!" Mom says. But, Carlos can't go to school. He has a cold. "I will take good care of you," Mom says. "You will be better soon!"



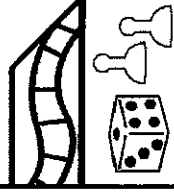
Mom tucks Carlos in his bed. "Here you go," she says. "Now you will be warm!"




Mom gets Carlos a box of tissues. Then, she makes him some warm chicken soup. "Yum," Carlos says. "It smells so good!" He eats and eats. He eats it all up.



"I want to play a game now Mom!" says Carlos. She gets a game from the closet. She sets the game up on the bed.



"Am I still sick?" Carlos asks. *AH-CHOO!* The game flies off the bed and makes a mess! "Yes," Mom says. They both giggle.



1. What is this story mostly about?

---



---

2. Use a crayon to find the answers.



What did Mom do after she tucked Carlos in bed?

3. How does the story end?

---



---



---



---



Picture it!

Name \_\_\_\_\_

# High Frequency Words

should


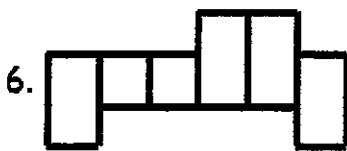
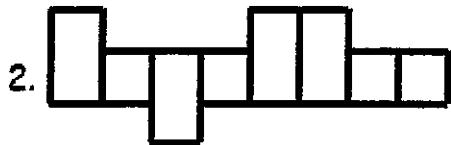
grow

together

water

pretty


green



D	G	R	H	W	T	P	P
H	R	N	R	A	O	F	R
Q	Q	Q	O	T	G	S	E
G	F	K	U	E	E	H	T
R	R	F	K	R	T	O	T
O	D	Y	U	X	H	U	Y
W	I	Q	C	F	E	L	Y
G	R	E	E	N	R	D	K


## ABC Order

1.	_____
2.	_____
3.	_____
4.	_____
5.	_____
6.	_____




It decomposed to:

--	--




It decomposed to:

6	5
---	---




It decomposed to:

	5
--	---




It decomposed to:

5	
---	--



It decomposed to:

4	2
---	---



It decomposed to:

4	
---	--

Name \_\_\_\_\_ Date \_\_\_\_\_

## Missing Addends

Total Problems: 27  
Problems Correct: \_\_\_\_\_

Solve each problem.

### Finding Missing Addends Is a Breeze!

1. 
$$\begin{array}{r} 8 \\ + \square \\ \hline 12 \end{array}$$

2. 
$$\begin{array}{r} 5 \\ + \square \\ \hline 14 \end{array}$$

3. 
$$\begin{array}{r} 9 \\ + \square \\ \hline 18 \end{array}$$

4. 
$$\begin{array}{r} 4 \\ + \square \\ \hline 13 \end{array}$$

5. 
$$\begin{array}{r} 8 \\ + \square \\ \hline 17 \end{array}$$

6. 
$$\begin{array}{r} 7 \\ + \square \\ \hline 11 \end{array}$$

7. 
$$\begin{array}{r} 6 \\ + \square \\ \hline 14 \end{array}$$

8. 
$$\begin{array}{r} 8 \\ + \square \\ \hline 16 \end{array}$$

9. 
$$\begin{array}{r} 3 \\ + \square \\ \hline 11 \end{array}$$

10. 
$$\begin{array}{r} 9 \\ + \square \\ \hline 13 \end{array}$$

11. 
$$\begin{array}{r} 9 \\ + \square \\ \hline 15 \end{array}$$

12. 
$$\begin{array}{r} 10 \\ + \square \\ \hline 12 \end{array}$$

13. 
$$\begin{array}{r} 6 \\ + \square \\ \hline 13 \end{array}$$

14. 
$$\begin{array}{r} 7 \\ + \square \\ \hline 16 \end{array}$$

15. 
$$\begin{array}{r} 7 \\ + \square \\ \hline 12 \end{array}$$

16. 
$$\begin{array}{r} 6 \\ + \square \\ \hline 11 \end{array}$$

17. 
$$\begin{array}{r} 5 \\ + \square \\ \hline 10 \end{array}$$

18. 
$$\begin{array}{r} 6 \\ + \square \\ \hline 12 \end{array}$$

19. 
$$\begin{array}{r} 8 \\ + \square \\ \hline 14 \end{array}$$

20. 
$$\begin{array}{r} 9 \\ + \square \\ \hline 14 \end{array}$$

21. 
$$\begin{array}{r} 8 \\ + \square \\ \hline 16 \end{array}$$

22. 
$$\begin{array}{r} 9 \\ + \square \\ \hline 11 \end{array}$$

23. 
$$\begin{array}{r} 7 \\ + \square \\ \hline 14 \end{array}$$

24. 
$$\begin{array}{r} 6 \\ + \square \\ \hline 15 \end{array}$$

25. 
$$\begin{array}{r} 8 \\ + \square \\ \hline 13 \end{array}$$

26. 
$$\begin{array}{r} 7 \\ + \square \\ \hline 15 \end{array}$$

27. 
$$\begin{array}{r} 4 \\ + \square \\ \hline 13 \end{array}$$



Name: \_\_\_\_\_

**Read it , Fix it  
and Write it !**

Directions: Rewrite each sentence correctly.  
Begin each sentence with a capital letter and  
add punctuation.

## The Pet Shop

1. we will go to the pet shop

2. we like going to the pet shop

3. we will go on saturday


4. we want to see the kittens

5. we want to see the puppies

I used capital letters.

I used spaces.

I used punctuation.



Name \_\_\_\_\_

## THE AIRPORT

An airport is a place for airplanes.

7 Airplanes land there. Airplanes take

12 off there. An airport has runways.

18 Runways are roads for airplanes.

23 Airplanes land on runways.

27 Airplanes take off on

31 runways. People go to the

36 airport to take a trip. People can eat at the

46 airport. People can shop at the airport. An airport

5 has a lot of noise. Airplanes make the noise. They make

66 noise when they land. They make noise when they take off.

77

1. What do airplanes do at the airport?

- a. land
- b. eat
- c. shop

2. Yes or no?

People can shop at the airport.


- a. yes
- b. no

3. Airplanes land on \_\_\_\_\_.

- a. people
- b. roads
- c. runways

4. Airplanes make noise when they \_\_\_\_\_.

- a. take off
- b. eat
- c. shop








Name \_\_\_\_\_

# Spelling Words

➔ Directions: Write the spelling words in ABC order.



1. \_\_\_\_\_
2. \_\_\_\_\_
3. \_\_\_\_\_
4. \_\_\_\_\_



1. \_\_\_\_\_
2. \_\_\_\_\_
3. \_\_\_\_\_



1. \_\_\_\_\_
2. \_\_\_\_\_
3. \_\_\_\_\_

Name: \_\_\_\_\_

Date: \_\_\_\_\_



© Meet Miss Parker

# Max's Mix-Up



134 words

Directions: Read the story 3 times. Then, answer the questions.

"Max! Time to wake up!" Mom yelled. Max jumped out of bed. "Oh no!" he yelled. "I am late! I have to meet Molly at the bus stop!"

Max ran to the kitchen. He took an apple and gobbled it down. *Crunch! Crunch!* After, he brushed his teeth. He grabbed his backpack then ran to the door.

"Max!" Mom yelled. "Where are you going?" But it was too late. Max slammed the door. He ran down the street to the bus stop. "I made it!" he said. "I made it just in time!"

Max looked for his friend Molly. He looked and looked, but he did not see her. "Where is Molly?" he said. "The bus will be here soon!" Just then, Max looked at his watch. "Sunday!" he yelled. "Silly me!" Max giggled.

1. Use a crayon to find the answers.



Who is the main character?



What happened after Max got to the bus stop?

2. What does gobbled mean?

eat fast

throw

eat slow

3. Why was Molly not at the bus stop?

4. What do you think would happen next if the story went on?

